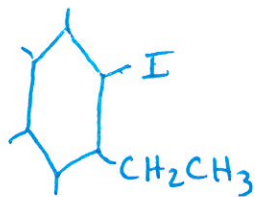


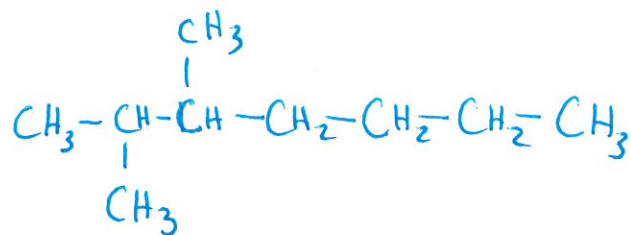


3. Draw the structures for the following organic compounds.

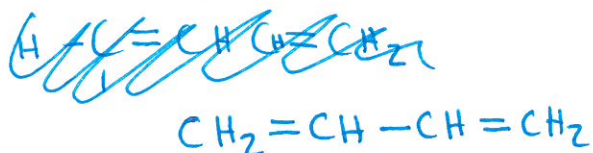
a. 1 iodo, 2 ethyl cyclohexane



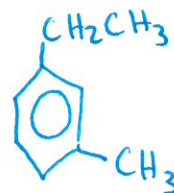
e. 2, 3 - dimethyl heptane



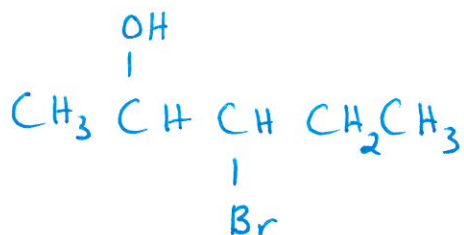
b. 1, 3 butadiene



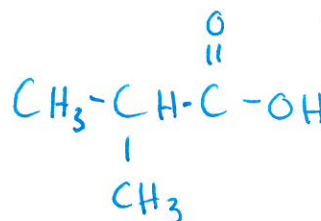
f. m - ethylmethylbenzene



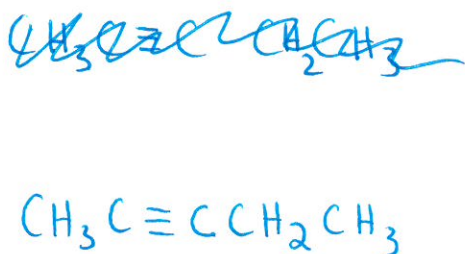
c. 3 bromo 2 pentanol



g. 2 methyl propanoic acid



d. 2 pentyne



h. 2-chloro 3 ethyl, 4, 4 dimethyl octane

